


NAME THAT POLYGON!


Can you name these polygons according to the number of their sides?
Have a parent or teacher point to the shape then have your little one state the name aloud.




Four sides




Five sides




Six sides



Seven sides



Eight sides



Nine sides